
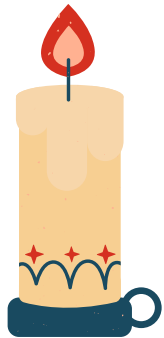


A stylized winter landscape illustration in shades of blue and white. It features snow-covered trees, a small house with smoke rising from its chimney, and rolling hills in the background.

# Matematická rozcvička – únor

## Postup:

**Zalaminujte a rozstříhejte karty s obrázky a čísla (obrázek s číslem nechte vždy u pospolu). Tyto karty rozmístěte po třídě/chodbě. Každý žák obdrží pracovní list s příklady a jeho úkolem je zjistit, jaké číslo představují dané obrázky a následně příklady vypočítat.**



0

1

2

3

4





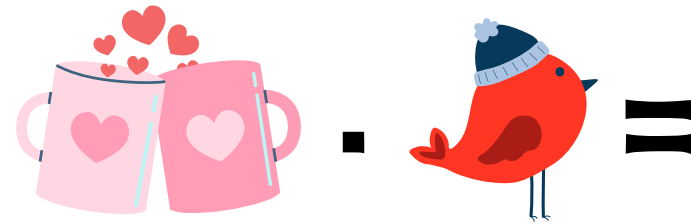




5




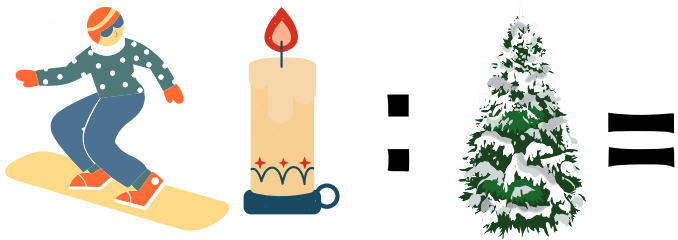




6

7

8

9





**Řešení:**

$$14 : 2 = 7$$

$$8 \cdot 9 = 72$$

$$36 : 6 = 6$$

$$100 : 10 = 10$$

$$3 \cdot 6 = 18$$

$$7 \cdot 5 = 35$$

$$48 : 6 = 8$$

$$1 \cdot 3 = 3$$

$$25 : 5 = 5$$

$$4 \cdot 9 = 36$$

$$9 \cdot 0 = 0$$

$$45 : 9 = 5$$

$$6 \cdot 4 = 24$$

$$81 : 9 = 9$$

$$3 \cdot 2 = 6$$

$$10 : 5 = 2$$

$$6 \cdot 7 = 42$$

$$3 \cdot 10 = 30$$

$$63 : 7 = 9$$

$$8 \cdot 2 = 16$$